


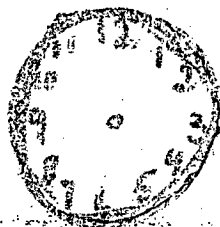


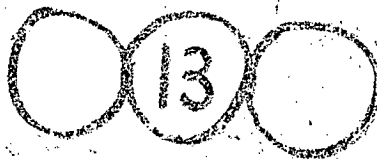


Name: _____



||



7 horas

9 horas

4-

$$\begin{array}{r} 6 \\ + 7 \\ \hline \end{array}$$


$$\begin{array}{r} 8 \\ + 6 \\ \hline \end{array}$$

$$\begin{array}{r} 6 \\ + 9 \\ \hline \end{array}$$

$$\begin{array}{r} 13 \\ - 6 \\ \hline \end{array}$$

$$\begin{array}{r} 15 \\ - 9 \\ \hline \end{array}$$

1- No lago estão 6 patinhos, chegam mais 2 patinhos. Quantos patinhos ficaram no lago?



Ficaram patinhos

2- Beto comeu 4 bananas, 2 abacates e 1 mamão. Quantas frutas Beto comeu?

Beto comeu frutas

3- Rosa tinha 8 bolas. Deu 3 a Mara. Com quantas bolas ficou?

Rosa ficou com bolas